













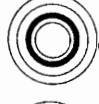





DIRECTIONS:






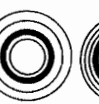

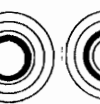



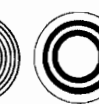




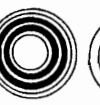


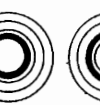
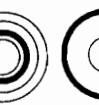
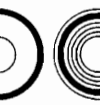
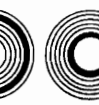

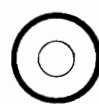



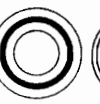
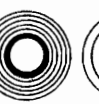


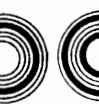















Each arrow diagram on page 2 represents a number sentence. Find the number sentence for any of these diagrams in the answer columns below. Notice the CIRCLE DESIGN next to the answer.

Find the CIRCLE DESIGN of your answer in the code at the bottom of the page. Each time it appears, write the letter of the arrow diagram above it.

KEEP WORKING AND YOU WILL DECODE A "SONG FOR SAIL!"

 $6 + -7 = -1$	 $-20 + 5 = -15$	 $-10 + 20 = 10$
 $-40 + 40 = 0$	 $-3 + 5 = 2$	 $60 + -40 = 20$
 $10 + -4 = 6$	 $-6 + 8 = 2$	 $3 + -3 = 0$
 $-25 + 25 = 0$	 $-30 + 50 = 20$	 $10 + -25 = -15$
 $2 + -6 = -4$	 $-5 + 7 = 2$	 $5 + -1 = 4$
 $-4 + 2 = -2$	 $8 + -12 = -4$	 $-6 + 4 = -2$

TITLE: A SONG FOR SAIL

PAGE 2

